





COMPLETA LE TABELLE

N° 	$\times 10$	$\times 100$	$\times 1000$
25
0,18
.....	33,4
.....	3,6
.....	777
.....	16
.....	90


N° 	$: 10$	$: 100$	$: 1000$
1500
48
.....	6,1
.....	0,81
.....	22
.....	1,2
.....	7,1


COMPLETA LE TABELLE

N° 	$\times 10$	$\times 100$	$\times 1000$
0,1
2,47
.....	16,2
.....	2,1
.....	132
.....	18,3
.....	40

N° 	$: 10$	$: 100$	$: 1000$
0,84
5,02
.....	3,15
.....	0,15
.....	33
.....	3,5
.....	9,1

COMPLETA LE TABELLE

N° 	$\times 10$	$\times 100$	$\times 1000$
0,66
0,01
.....	19,2
.....	11,1
.....	1080
.....	11,3
.....	60

N° 	$: 10$	$: 100$	$: 1000$
0,14
6,08
.....	4,15
.....	0,19
.....	31
.....	7,5
.....	8,1

VERO O FALSO?

scheda 4

RISOLVI LE OPERAZIONI E SCRIVI IN OGNI CASELLINA

F SE RITIENI CHE IL RISULTATO SCRITTO SIA FALSO,

V SE RITIENI CHE IL RISULTATO SCRITTO SIA VERO.

$123 \times 10 = 1230$

$25,39 \times 100 = 2539$

$14,1 \times 10 = 141$

$0,06 \times 10 = 6$

$9,3 \times 100 = 930$

$16,15 \times 10 = 161,5$

$1500 : 10 = 150$

$600 : 100 = 6$

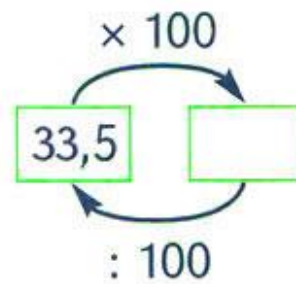
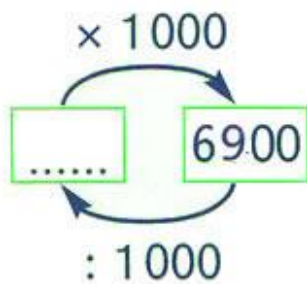
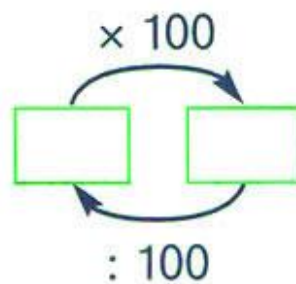
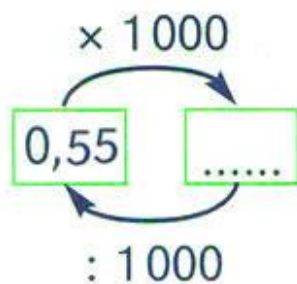
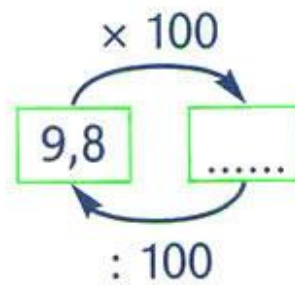
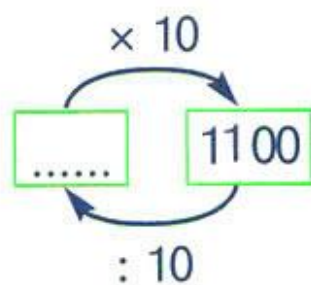
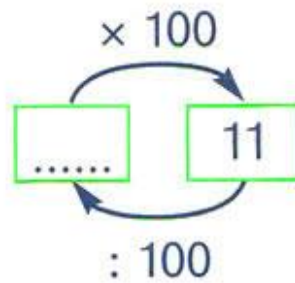
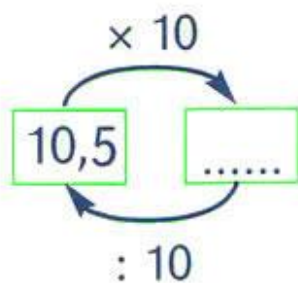
$15070 : 1000 = 15,07$

$3230 : 100 = 3,23$

$2050 : 100 = 20,5$

$99,3 : 100 = 993$

COMPLETA



COMPLETA

$$\dots \times 10 = 11$$

$$\dots \times 100 = 9,9$$

$$\dots : 1000 = 5,7$$

$$\dots : 100 = 0,5$$

$$50 : \dots = 5$$

$$23,7 : 10 = \dots$$

$$2310 : 100 = \dots$$

$$298,1 : \dots = 2,981$$

$$95,2 \times 10 = \dots$$

$$549,7 \times \dots = 5497$$

$$1000 \times \dots = 10000$$

$$395 \times 100 = \dots$$